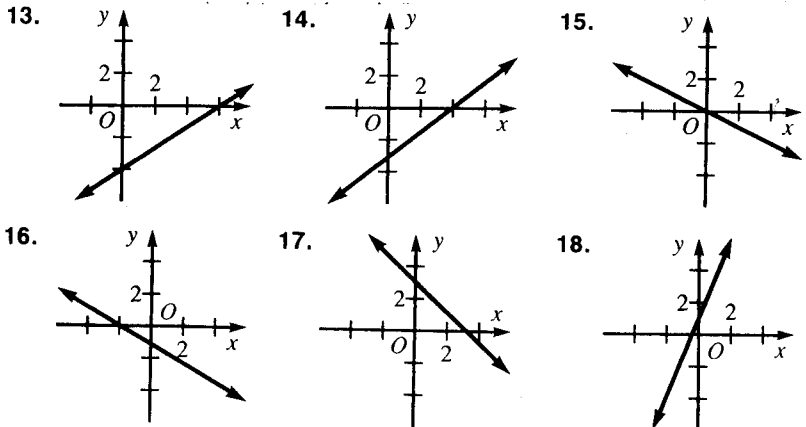


### 8-4 The Slope-Intercept Form of a Linear Equation

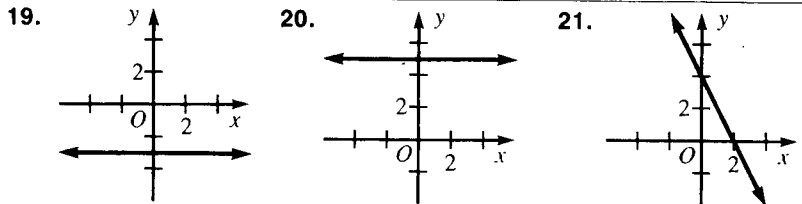


The slope is 2 and the y-intercept is 4.      The slope is 2 and the y-intercept is 4.      and the y-intercept is 4.

Find the slope and the y-intercept.

6.  $-\frac{1}{3}; -3$

1.  $y = x - 3$  1; -3    2.  $y = 2x + 3$  2; 3    3.  $y = -2$  0; -2    4.  $y = \frac{1}{3}x + 4$   $\frac{1}{3}$ ; 4  
 5.  $y = -\frac{1}{2}x - \frac{1}{2}$  0    6.  $y = -\frac{1}{3}x - 3$     7.  $y = -2x + 6$  -2; 6    8.  $y = -4x + 8$  -4; 8  
 9.  $y = -x + 5$  -1; 5    10.  $y = x - 9$  1; -9    11.  $y = 3x - 2$  3; -2    12.  $y = 3$  0; 3

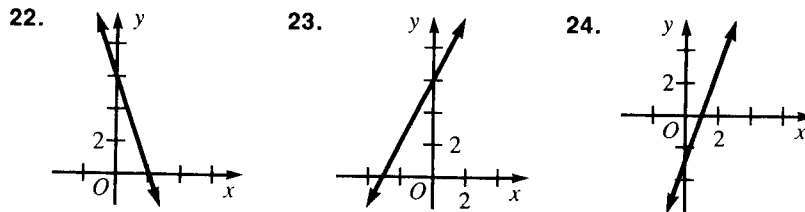


Use only the slope and y-intercept to graph each equation. You may wish to verify your graphs on a computer or a graphing calculator.

Graphs given at the back of this Answer Key.

13.  $y = \frac{2}{3}x - 4$     14.  $y = \frac{3}{4}x - 3$     15.  $y = -\frac{1}{2}x$     16.  $y = -\frac{3}{4}x - 1$   
 17.  $y = -x + 3$     18.  $y = 2x + 1$     19.  $y = -3$     20.  $y = 5$

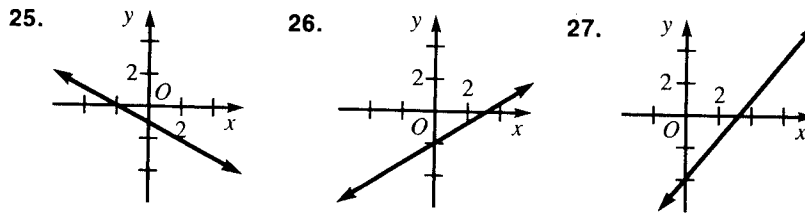
### 8-4 The Slope-Intercept Form of a Linear Equation (continued)



Use only the slope and y-intercept to graph each equation. You may wish to verify your graphs on a computer or a graphing calculator.

Graphs given at the back of this Answer Key.

21.  $2x + y = 4$     22.  $3x + y = 6$     23.  $2x - y = -6$     24.  $3x - y = 3$   
 25.  $x + 2y = -2$     26.  $2x - 3y = 6$     27.  $4x - 3y = 12$     28.  $x + 4y = 4$



Determine whether the lines whose equations are given are parallel.

29.  $2x - y = 5$     30.  $x - 3y = 2$     31.  $2x - y = 6$   
 $2x - y = 8$  **yes**     $-2x + 6y = 12$  **yes**     $2y - x = 6$  **no**  
 32.  $3x - y = 2$     33.  $\frac{1}{2}x - \frac{1}{2}y = 4$     34.  $4x + \frac{1}{4}y = 2$   
 $-6x + 2y = 8$  **yes**     $2x - 2y = 3$  **yes**     $4x + 4y = 2$  **no**

### Mixed Review Exercises

Find the slope of the line through each pair of given points.

1.  $(-2, 1), (-1, 2)$  1    2.  $(1, 2), (3, -2)$  -2    3.  $(-3, 4), (-1, -2)$  -3

- Factor.  $(2x + 3)(x + 2)$      $2(x - 1)^2$      $(2y + 5z)(2y - 5z)$   
 5.  $2x^2 + 7x + 6$     6.  $2x^2 - 4x + 2$     7.  $4y^2 - 25z^2$

